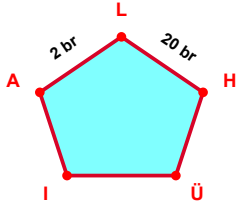
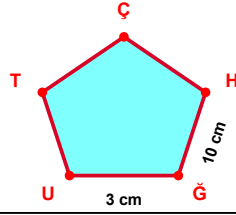


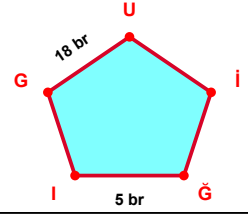
SORU: Aşağıdaki şekillerde verilen, kenar uzunlukları farklarını bulunuz.



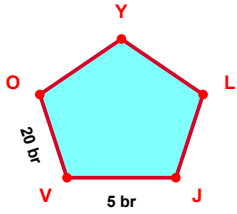
$$|HL| - |LA| = \dots\dots\dots$$



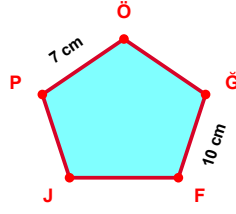
$$|ĞH| - |UĞ| = \dots\dots\dots$$



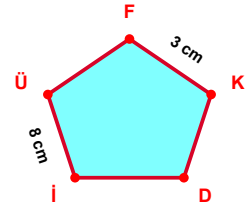
$$|UG| - |İĞ| = \dots\dots\dots$$



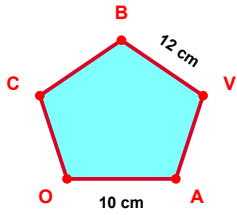
$$|OV| - |VJ| = \dots\dots\dots$$



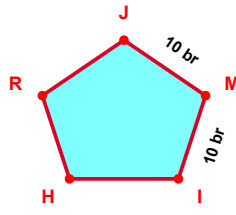
$$|FĞ| - |ÖP| = \dots\dots\dots$$



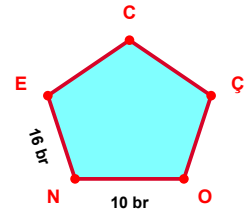
$$|Üİ| - |KF| = \dots\dots\dots$$



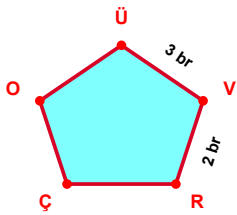
$$|VB| - |OA| = \dots\dots\dots$$



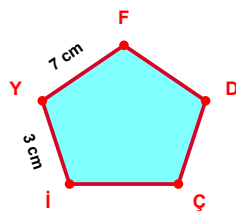
$$|IM| - |MJ| = \dots\dots\dots$$



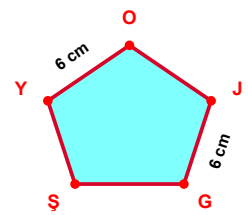
$$|EN| - |NO| = \dots\dots\dots$$



$$|VÜ| - |RV| = \dots\dots\dots$$

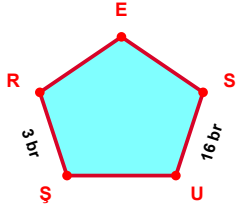


$$|FY| - |Yİ| = \dots\dots\dots$$

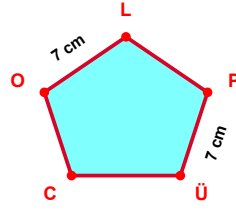


$$|GJ| - |OY| = \dots\dots\dots$$

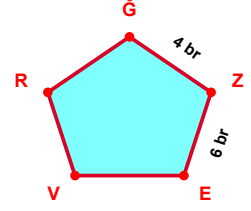
SORU: Aşağıdaki şekillerde verilen, kenar uzunlukları farklarını bulunuz.



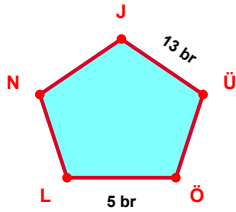
$$|US| - |RŞ| = \dots\dots\dots$$



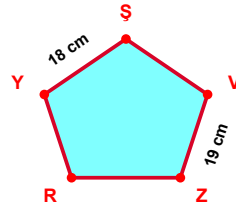
$$|ÜP| - |LO| = \dots\dots\dots$$



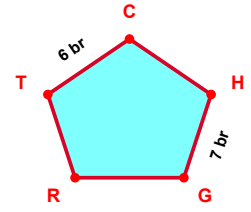
$$|EZ| - |ZĞ| = \dots\dots\dots$$



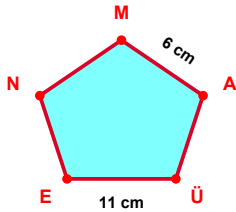
$$|ÜJ| - |LÖ| = \dots\dots\dots$$



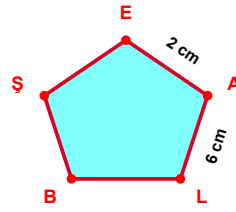
$$|ZV| - |ŞY| = \dots\dots\dots$$



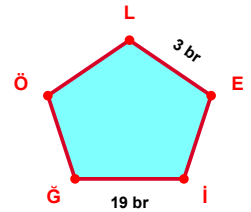
$$|GH| - |CT| = \dots\dots\dots$$



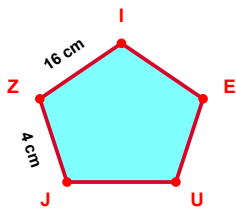
$$|EÜ| - |AM| = \dots\dots\dots$$



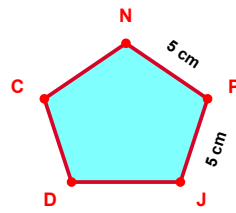
$$|LA| - |AE| = \dots\dots\dots$$



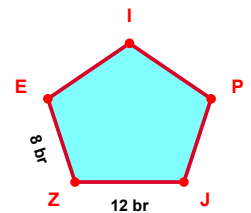
$$|Ğİ| - |EL| = \dots\dots\dots$$



$$|IZ| - |ZJ| = \dots\dots\dots$$



$$|JP| - |PN| = \dots\dots\dots$$



$$|ZJ| - |EZ| = \dots\dots\dots$$

SÜREÇ ODAKLI DEĞERLENDİRME ÖLÇEĞİ

Doğru Sayısı: / 24

Öğretmen ilgili kutucuğu işaretler.

Geliştirilmeli (0-8)

İyi (9-14)

Çok İyi (15-20)

Mükemmel (21-24)

☐
☐
☐
☐

Hazırlayan:

Bu bölüme sınıfınızın ilgili kazanıma yönelik genel durumuna ilişkin gözlem ve izlenimlerinizi, öğrencilerinizin bu kazanımla ilgili öğrenme eksikliklerini ve bu eksikliklerin giderilmesi amacıyla yaptığınız/yapmayı planladığınız faaliyetleri not edebilirsiniz.

| No | Adı - Soyadı | Toplam Puan | Değerlendirme |
|----|--------------|-------------|---------------|
| 1 | | | |
| 2 | | | |
| 3 | | | |
| 4 | | | |
| 5 | | | |
| 6 | | | |
| 7 | | | |
| 8 | | | |
| 9 | | | |
| 10 | | | |
| 11 | | | |
| 12 | | | |
| 13 | | | |
| 14 | | | |
| 15 | | | |
| 16 | | | |
| 17 | | | |
| 18 | | | |
| 19 | | | |
| 20 | | | |
| 21 | | | |
| 22 | | | |
| 23 | | | |
| 24 | | | |
| 25 | | | |
| 26 | | | |
| 27 | | | |
| 28 | | | |
| 29 | | | |
| 30 | | | |
| 31 | | | |
| 32 | | | |
| 33 | | | |
| 34 | | | |
| 35 | | | |

Hazırlayan: